

Level 5 – Piano Theory Test

Name: _____

1. What does a dot **beside** the note do to that note?

_____/1


2. What is the dot **above or below** the note called?

_____/1

3. And what does that dot **above or below** the note do to that note?


_____/1

4. Beside each of these rests, write the note which corresponds to it in value




_____/3

5. Name the following note on the treble stave:



_____/6

6. Name the following note on the bass stave:



_____/6


7. Complete the following bars with quavers



A musical staff in treble clef with a 4/4 time signature. The staff contains four measures. The first measure has a quarter note on G4 and a quarter note on A4. The second measure has a half note on B4. The third measure has a quarter note on C5 and a quarter note on D5. The fourth measure has a quarter note on E5 and a quarter note on F5.

/4


8. Fill in the missing note in these octaves in the treble:



A musical staff in treble clef with a 4/4 time signature. The staff contains four measures. The first measure has a quarter note on G4 and a quarter note on A4. The second measure has a quarter note on B4 and a quarter note on C5. The third measure has a quarter note on D5 and a quarter note on E5. The fourth measure has a quarter note on F5 and a quarter note on G5.

/3

9. Fill in the missing note in these octaves in the bass:



A musical staff in bass clef with a 4/4 time signature. The staff contains four measures. The first measure has a quarter note on G2 and a quarter note on F2. The second measure has a quarter note on E2 and a quarter note on D2. The third measure has a quarter note on C2 and a quarter note on B1. The fourth measure has a quarter note on A1 and a quarter note on G1.

/3

_____ Total Score /28